



**NAMIBIA UNIVERSITY
OF SCIENCE AND TECHNOLOGY**

FACULTY OF COMMERCE, HUMAN SCIENCES AND EDUCATION

DEPARTMENT OF HOSPITALITY AND TOURISM

QUALIFICATION: BACHELORS DEGREE IN TOURISM ; INNOVATION AND DEVELOPMENT	
QUALIFICATION CODE: 07BTID	MODE: FM
COURSE CODE: TGE510S	COURSE NAME: TOURISM GEOGRAPHY
SESSION: JUNE 2025	PAPER: 1
DURATION: 2 HOURS	MARKS: 100

1ST OPPORTUNITY EXAMINATION QUESTION PAPER	
EXAMINER:	Ms. U. Tjitunga
MODERATOR:	Ms. E. Kuwa

INSTRUCTIONS	
<ol style="list-style-type: none">1. Answer ALL the questions and start each question on a new page.2. Read all questions carefully before answering.3. Number answers according to the numbering structure provided in the question paper.	

THIS QUESTION PAPER CONSISTS OF 4 PAGES (Including this front page)

Question 1**(10x2=20)**

Write one correct answer

- 1.1 The line on the exact opposite of the Prime Meridian.
- 1.2 As you travel from west to east, does it get later or earlier?
- 1.3 How many time zones are there in the world?
- 1.4 A _____ is exactly half of the earth.
- 1.5 The invisible line at 0 degrees latitude is called the _____.
- 1.6 What shape is the planet Earth?
- 1.7 The equator breaks the Earth into what two hemispheres?
- 1.8 Antarctica, Australia, and most of South America are in what hemisphere?
- 1.9 The Tropic of _____ is a line of latitude that runs through North America, the northern point of Africa, and Asia.
- 1.10 In which hemisphere would the Antarctic Circle be found?

Question 2**(5x3=15)**

Climate is the long-term condition of a particular region. The climate changes in a particular region are based on the atmosphere and environmental conditions of that region. Identify and describe the factors that affect the climate of a place.

Question 3**(5x2=10)**

There are several key elements that should be included each time a map is created in order to aid the viewer in understanding the communications of that map and to document the source of the geographic information used. Describe the different elements of a map.

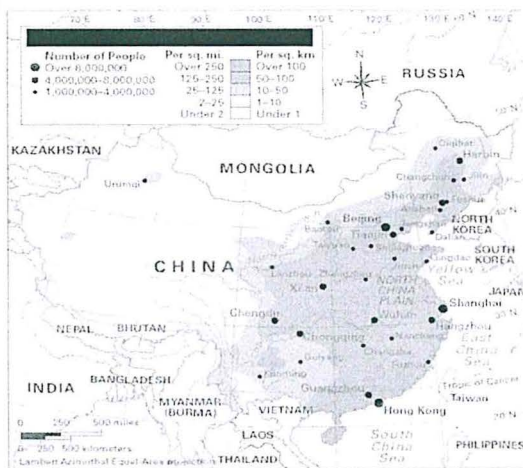
Question 4**(6x2=12)**

Write down which type of a map is shown below?

A.

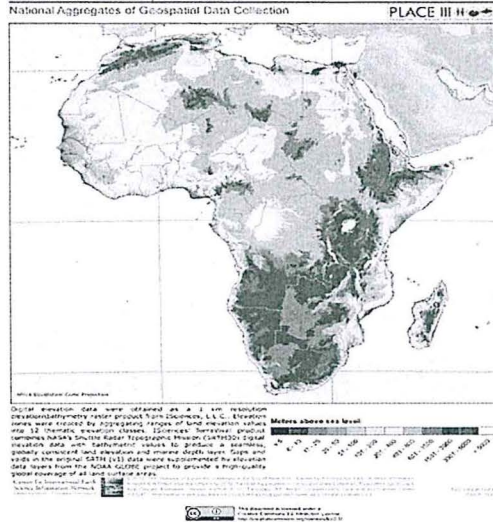


B.

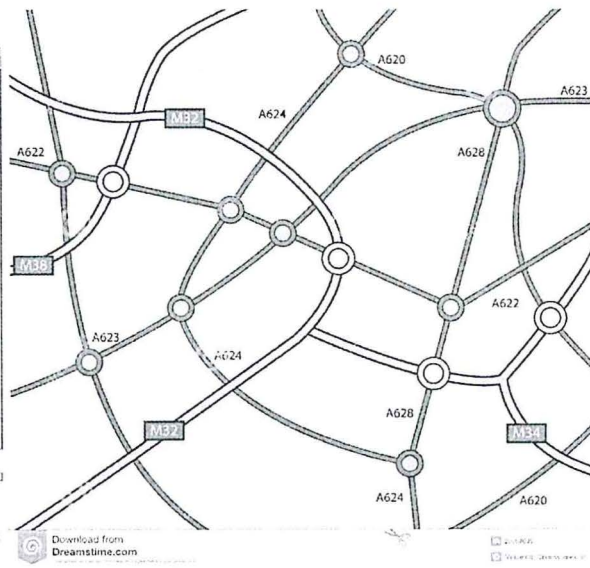


C.

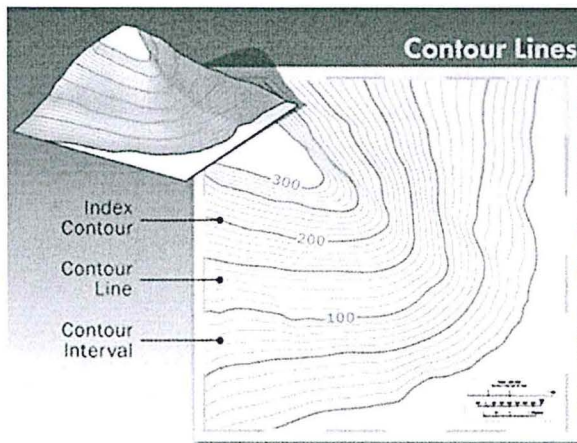
Population, Landscape and Climate Estimates, v3: Elevation Zones, Africa



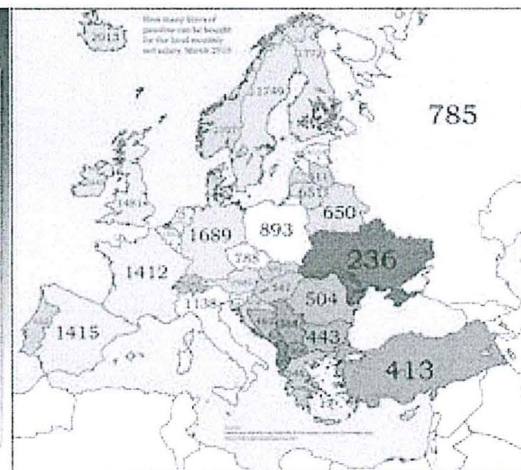
D.



E.



F.



Question 5

(5x4=20)

The Namibian landscape consists generally of five geographical areas, each with characteristic abiotic conditions and vegetation with some variation within and overlap between them. Describe five Namibian topographical regions.

Question 6

(9x2=18)

- 6.1 If you're hiking in a wilderness area, you should pair a good map with a ____ so that you don't get lost.
- 6.2 On a map, a blue blob typically indicates what sort of feature?
- 6.3 What's the purpose of a map legend?
- 6.4 Which term refers to a set of imaginary horizontal lines that cross the Earth?
- 6.5 A "needle" is an important part of which tool?
- 6.6 What does the color green typically mean?
- 6.7 On a map, which direction is to the RIGHT?
- 6.8 What does GPS stand for?
- 6.9 What can you do using the scale of a map?

Question 7

(5)

What is the purpose of a map?