

**NAMIBIA UNIVERSITY  
OF SCIENCE AND TECHNOLOGY**

**Faculty of Health, Natural Resources and Applied Sciences**

Department of Mathematics and Statistics

<b>QUALIFICATIONS:</b> BACHELOR OF SCIENCES IN APPLIED MATHEMATICS AND STATISTICS	
<b>QUALIFICATION CODE:</b> 07BSAM	<b>LEVEL:</b> 5
<b>COURSE:</b> STATISTICAL INFERENCE 1	<b>COURSE CODE:</b> SIN502S
<b>DATE:</b> NOVEMBER 2022	<b>SESSION:</b> 1
<b>DURATION:</b> 3 HOURS	<b>MARKS:</b> 100

<b>FIRST OPPORTUNITY EXAMINATION QUESTION PAPER</b>	
<b>EXAMINER(S)</b>	MR. EM. MWAHI, DR. D. NTIRAMPEBA
<b>MODERATOR:</b>	DR. J. ONG'ALA

**THIS QUESTION PAPER CONSISTS OF 6 PAGES**

(Including this front page)

**INSTRUCTIONS**

1. Answer all the questions and number your solutions correctly.
2. **Question 1** of this question paper entails multiple choice questions with options A to D. Write down the letter corresponding to the best option for each question.
3. For **Question 2, 3 & 4** you are required to show clearly all the steps used in the calculations.
4. All written work **MUST** be done in blue or black ink.
5. Untidy/ illegible work will attract no marks.

**PERMISSIBLE MATERIALS**

1. Non-Programmable Calculator without the cover

**ATTACHMENTS**

Z-table, t-table, Chi-square table, Mann-Whitney U table and the F-table

## SECTION A [MULTIPLE CHOICE]

Write down the letter corresponding to the best answer for each question.

### QUESTION 1 [20 MARKS]

- 1.1 You take a random sample from some population and form a 96% confidence interval for the population mean, which quantity is guaranteed to be in the interval you formed? [2]
- A) 0                      B)  $\mu$                       C)  $\bar{x}$                       D) 0.96
- 1.2 Increasing the sample size, while holding the confidence level the same, will do what to the length of your confidence interval? [2]
- A) Make it bigger    B) Make it smaller    C) It will stay the same  
D) Cannot be determined from the given information
- 1.3 What should be the value of z used in a 92% confidence interval? [2]
- A) 2.70                      B) 1.75                      C) 1.81                      D) 1.89
- 1.4 Why do we use inferential statistics? [2]
- A) To help explain the outcomes of random phenomena  
B) To make informed predictions about parameters we don't know  
C) To describe samples that are normal and large enough ( $n > 30$ )  
D) To generate samples of random data for a more reliable analysis
- 1.5 Statistics and parameters.... [2]
- A) Are both used to make inferences about  $\bar{x}$   
B) Describe the population and the sample, respectively.  
C) Describe the sample and the population, respectively.  
D) Describe the same group of individuals.
- 1.6 A waiter believes that his tips from various customers have a slightly right skewed distribution with a mean of 10 dollars and a standard deviation of 2.50 dollars. What is the probability that the average of 35 customers will be more than 13 dollars? [2]
- A) Almost 0.5              B. Almost zero              C. 0.1151                      D. 0.8849

- 1.7 A sample of size 55 is drawn from a slightly skewed distribution. What is the approximate shape of the sampling distribution? [2]
- A) Skewed Distribution    B) Binomial Distribution  
C) Normal Distribution    D) Uniform Distribution
- 1.8 The null hypothesis  $H_0: p=0.5$  against the alternative  $H_a: p>0.5$  was not rejected at level  $\alpha=0.1$ . Nate wants to know what the test will result at level  $\alpha=0.01$ . What will be his conclusion? [2]
- A) Reject  $H_0$ .  
B) Fail to Reject  $H_0$ .  
C) No conclusion can be made.  
D) Reject  $H_a$ .
- 1.9 For a test with the null hypothesis  $H_0: p = 0.5$  vs. the alternative  $H_a: p > 0.5$ , the null hypothesis was rejected at level  $\alpha=0.05$ . Das wants to perform the same test at level  $\alpha=0.10$ . What will be his conclusion? [2]
- A) Reject  $H_0$ .  
B) Fail to Reject  $H_0$ .  
C) No conclusion can be made.  
D) Reject  $H_a$ .
- 1.10 A null hypothesis was rejected at level  $\alpha=0.10$ . What will be the result of the test at level  $\alpha=0.05$ ? [2]
- A) Reject  $H_0$   
B) Fail to Reject  $H_0$   
C) No conclusion can be made  
D) Reject  $H_a$

**TURN OVER**

## SECTION B

### QUESTION 2 [31 Marks]

- 2.1 The lifetime of a light bulb is normally distributed with the mean 3000 hours and a standard deviation of 696 hours. A simple random sample of 36 bulbs is taken.
- (a) What are the expected value, standard deviation, and shape of the sampling distribution of  $\bar{x}$ ? [3]
- (b) What is the probability that the average life time in the sample will be between 2670.56 and 2809.76 hours? [5]
- (c) How large of a sample needs to be taken to provide a 0.01 probability that the average lifetime in the sample will be equal to or greater than 3219.24 hours? [5]
- 2.2 The personnel department of a large corporation wants to estimate the family dental expenses of its employees to determine the feasibility of providing dental insurance plan. A random sample of 10 employees reveals the following family dental expenses (in N\$) for the past year.
- 110 362 246 85 510 208 173 425 316 179
- (a) Find the mean point estimate for the employees' dental expenditure in the past year. [3]
- (b) Compute a 95% confidence interval for the true population mean in the employees' dental expenditure. [5]
- 2.3 An independent random sample of 200 college football players and 150 college basketball players in a certain state showed that 65% of football players received academic tutors while 58% of basketball players received academic tutors. Construct a 90 percent confidence interval for the difference in the proportion of football players that received tutors and the proportion of basketball players that received tutors for the population of this state. [10]



**QUESTION 3 [26 Marks]**

3.1 An instructor hypothesizes that the standard deviation of the final exam grades in her statistics class is larger for the male students than it is for the female students. The data from the final exam for the last semester are shown below. Assume that exam marks are normally distributed.

<b>Males</b>	<b>Females</b>
n = 16	n = 18
S = 4.2	S = 2.3

(a) Is there enough evidence to support her claim, using the 10% level of significance? [8]

(b) What assumptions do you make to justify the use of this test? [2]

3.2 A dietitian wishes to see if a person's cholesterol level will change if the diet is supplemented by a certain mineral. Six subjects were pretested, and then they took the mineral supplement for a 6-week period. The results are shown in the table below. Assuming that the population between pairs is normally distributed, can it be concluded that the cholesterol level has been changed? use  $\alpha=0.1$  [12]

<b>Subject</b>	1	2	3	4	5	6
<b>Before</b>	210	235	208	190	172	244
<b>After</b>	190	170	210	188	173	228

3.3 Copy and complete the ANOVA table below: [4]

<b>Source</b>	<b>Degree of freedom</b>	<b>Sum of squares</b>	<b>Mean square</b>	<b>F-ratio</b>
<b>Between samples</b>	3	216.67	.....	
<b>Within samples</b>	13	.....	.....	.....
<b>Total</b>	16	1090.47		

**QUESTION 4 [23 Marks]**

4.1 Give the underlying assumptions of the Mann-Whitney test [3]

4.2 A study was conducted on 16 dairy cattle. Eight cows were randomly assigned to a liquid regimen of water only (group 1); the others received liquid regimen of water with some ingredients (group 2). In addition, each animal was given 7.5 kg of grain per day and allowed to graze on hay at will. Although no significant differences were observed between the groups in the dairy milk-production gauges, such as milk-production and fat content of milk, the following data on daily hay consumption (in kg/cow) were of interest:

<b>Group1</b>	15.1	8.9	14.8	8.4	13.1	12.8	15.5	15.9
<b>Group2</b>	6.8	7.5	8.6	14.2	8.9	15.1	9.2	9.5

Use these data to test the researcher's hypothesis that there is a difference in mean hay consumption for the two diets. Use Mann-Whitney test with  $\alpha = 0.05$ . [10]

4.3 A public opinion poll surveyed a simple random sample of 1000 voters. Respondents were classified by gender (male or female) and by voting preference (Republican, Democrat, or Independent). Results are shown in the contingency table below.

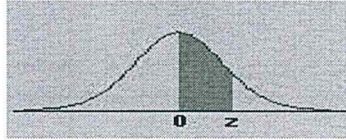
<b>Gender</b>	<b>Voting Preferences</b>		
	<b>Republican</b>	<b>Democrat</b>	<b>Independent</b>
<b>Male</b>	200	150	50
<b>Female</b>	250	300	50

Do the men's voting preferences independent of the women's preferences? Use a 0.05 level of significance. [15]

=====END OF EXAMINATION=====

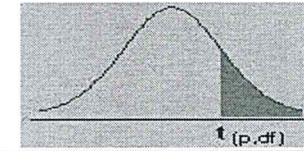


### APPENDIX C: The Standard Normal Distribution



z	0.00	0.01	0.02	0.03	0.04	0.05	0.06	0.07	0.08	0.09
0.0	0.0000	0.0040	0.0080	0.0120	0.0160	0.0199	0.0239	0.0279	0.0319	0.0359
0.1	0.0398	0.0438	0.0478	0.0517	0.0557	0.0596	0.0636	0.0675	0.0714	0.0753
0.2	0.0793	0.0832	0.0871	0.0910	0.0948	0.0987	0.1026	0.1064	0.1103	0.1141
0.3	0.1179	0.1217	0.1255	0.1293	0.1331	0.1368	0.1406	0.1443	0.1480	0.1517
0.4	0.1554	0.1591	0.1628	0.1664	0.1700	0.1736	0.1772	0.1808	0.1844	0.1879
0.5	0.1915	0.1950	0.1985	0.2019	0.2054	0.2088	0.2123	0.2157	0.2190	0.2224
0.6	0.2257	0.2291	0.2324	0.2357	0.2389	0.2422	0.2454	0.2486	0.2517	0.2549
0.7	0.2580	0.2611	0.2642	0.2673	0.2704	0.2734	0.2764	0.2794	0.2823	0.2852
0.8	0.2881	0.2910	0.2939	0.2967	0.2995	0.3023	0.3051	0.3078	0.3106	0.3133
0.9	0.3159	0.3186	0.3212	0.3238	0.3264	0.3289	0.3315	0.3340	0.3365	0.3389
1.0	0.3413	0.3438	0.3461	0.3485	0.3508	0.3531	0.3554	0.3577	0.3599	0.3621
1.1	0.3643	0.3665	0.3686	0.3708	0.3729	0.3749	0.3770	0.3790	0.3810	0.3830
1.2	0.3849	0.3869	0.3888	0.3907	0.3925	0.3944	0.3962	0.3980	0.3997	0.4015
1.3	0.4032	0.4049	0.4066	0.4082	0.4099	0.4115	0.4131	0.4147	0.4162	0.4177
1.4	0.4192	0.4207	0.4222	0.4236	0.4251	0.4265	0.4279	0.4292	0.4306	0.4319
1.5	0.4332	0.4345	0.4357	0.4370	0.4382	0.4394	0.4406	0.4418	0.4429	0.4441
1.6	0.4452	0.4463	0.4474	0.4484	0.4495	0.4505	0.4515	0.4525	0.4535	0.4545
1.7	0.4554	0.4564	0.4573	0.4582	0.4591	0.4599	0.4608	0.4616	0.4625	0.4633
1.8	0.4641	0.4649	0.4656	0.4664	0.4671	0.4678	0.4686	0.4693	0.4699	0.4706
1.9	0.4713	0.4719	0.4726	0.4732	0.4738	0.4744	0.4750	0.4756	0.4761	0.4767
2.0	0.4772	0.4778	0.4783	0.4788	0.4793	0.4798	0.4803	0.4808	0.4812	0.4817
2.1	0.4821	0.4826	0.4830	0.4834	0.4838	0.4842	0.4846	0.4850	0.4854	0.4857
2.2	0.4861	0.4864	0.4868	0.4871	0.4875	0.4878	0.4881	0.4884	0.4887	0.4890
2.3	0.4893	0.4896	0.4898	0.4901	0.4904	0.4906	0.4909	0.4911	0.4913	0.4916
2.4	0.4918	0.4920	0.4922	0.4925	0.4927	0.4929	0.4931	0.4932	0.4934	0.4936
2.5	0.4938	0.4940	0.4941	0.4943	0.4945	0.4946	0.4948	0.4949	0.4951	0.4952
2.6	0.4953	0.4955	0.4956	0.4957	0.4959	0.4960	0.4961	0.4962	0.4963	0.4964
2.7	0.4965	0.4966	0.4967	0.4968	0.4969	0.4970	0.4971	0.4972	0.4973	0.4974
2.8	0.4974	0.4975	0.4976	0.4977	0.4977	0.4978	0.4979	0.4979	0.4980	0.4981
2.9	0.4981	0.4982	0.4982	0.4983	0.4984	0.4984	0.4985	0.4985	0.4986	0.4986
3.0	0.4987	0.4987	0.4987	0.4988	0.4988	0.4989	0.4989	0.4989	0.4990	0.4990

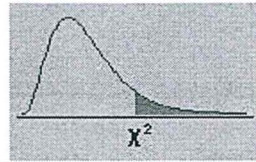
### APPENDIX D: The t-distribution



d/fp	0.40	0.25	0.10	0.05	0.025	0.01	0.005	0.0005
1	0.324920	1.000000	3.077684	6.313752	12.70620	31.82052	63.65674	636.6192
2	0.288675	0.816497	1.885618	2.919986	4.30265	6.96456	9.92484	31.5991
3	0.276671	0.764892	1.637744	2.353363	3.18245	4.54070	5.84091	12.9240
4	0.270722	0.740697	1.533206	2.131847	2.77645	3.74695	4.60409	8.6103
5	0.267181	0.726687	1.475884	2.015048	2.57058	3.36493	4.03214	6.8688
6	0.264835	0.717558	1.439756	1.943180	2.44691	3.14267	3.70743	5.9588
7	0.263167	0.711142	1.414924	1.894579	2.36462	2.99795	3.49948	5.4079
8	0.261921	0.706387	1.396815	1.859548	2.30600	2.89646	3.35539	5.0413
9	0.260955	0.702722	1.383029	1.833113	2.26216	2.82144	3.24984	4.7809
10	0.260185	0.699812	1.372184	1.812461	2.22814	2.76377	3.16927	4.5869
11	0.259556	0.697445	1.363430	1.795885	2.20099	2.71808	3.10581	4.4370
12	0.259033	0.695483	1.356217	1.782288	2.17881	2.68100	3.05454	4.3178
13	0.258591	0.693829	1.350171	1.770933	2.16037	2.65031	3.01228	4.2208
14	0.258213	0.692417	1.345030	1.761310	2.14479	2.62449	2.97684	4.1405
15	0.257885	0.691197	1.340606	1.753050	2.13145	2.60248	2.94671	4.0728
16	0.257599	0.690132	1.336757	1.745884	2.11991	2.58349	2.92078	4.0150
17	0.257347	0.689195	1.333379	1.739607	2.10982	2.56693	2.89823	3.9651
18	0.257123	0.688364	1.330391	1.734064	2.10092	2.55238	2.87844	3.9216
19	0.256923	0.687621	1.327728	1.729133	2.09302	2.53948	2.86093	3.8834
20	0.256743	0.686954	1.325341	1.724718	2.08596	2.52798	2.84534	3.8495
21	0.256580	0.686352	1.323188	1.720743	2.07961	2.51765	2.83136	3.8193
22	0.256432	0.685805	1.321237	1.717144	2.07387	2.50832	2.81876	3.7921
23	0.256297	0.685306	1.319460	1.713872	2.06866	2.49987	2.80734	3.7676
24	0.256173	0.684850	1.317836	1.710882	2.06390	2.49216	2.79694	3.7454
25	0.256060	0.684433	1.316345	1.708141	2.05954	2.48511	2.78744	3.7251
26	0.255955	0.684043	1.314972	1.705618	2.05553	2.47863	2.77871	3.7066
27	0.255858	0.683685	1.313703	1.703288	2.05183	2.47266	2.77068	3.6896
28	0.255768	0.683353	1.312527	1.701131	2.04841	2.46714	2.76326	3.6739
29	0.255684	0.683044	1.311434	1.699127	2.04523	2.46202	2.75639	3.6594
30	0.255605	0.682756	1.310415	1.697261	2.04227	2.45726	2.75000	3.6460
inf	0.253347	0.674490	1.281552	1.644854	1.95996	2.32635	2.57583	3.2905



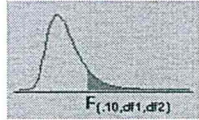
## APPENDIX E: The Chi-Square Distribution



d/fp	.995	.990	.975	.950	.900	.750	.500	.250	.100	.050	.025	.010	.005
1	0.00004	0.00016	0.00098	0.00393	0.01579	0.10153	0.45494	1.32330	2.70554	3.84146	5.02389	6.63490	7.87944
2	0.01003	0.02010	0.05064	0.10259	0.21072	0.57536	1.38629	2.77259	4.60517	5.99146	7.37776	9.21034	10.59663
3	0.07172	0.11483	0.21580	0.35185	0.58437	1.21253	2.36597	4.10834	6.25139	7.81473	9.34840	11.34487	12.83816
4	0.20699	0.29711	0.48442	0.71072	1.06362	1.92256	3.35669	5.38527	7.77944	9.48773	11.14329	13.27670	14.86026
5	0.41174	0.55430	0.83121	1.14548	1.61031	2.67460	4.35146	6.62568	9.23636	11.07050	12.83250	15.08627	16.74960
6	0.67573	0.87209	1.23734	1.63538	2.20413	3.45460	5.34812	7.84080	10.64464	12.59159	14.44938	16.81189	18.54758
7	0.98926	1.23904	1.68987	2.16735	2.83311	4.25485	6.34581	9.03715	12.01704	14.06714	16.01276	18.47531	20.27774
8	1.34441	1.64650	2.17973	2.73264	3.48954	5.07064	7.34412	10.21885	13.36157	15.50731	17.53455	20.09024	21.95495
9	1.73493	2.08790	2.70039	3.32511	4.16816	5.89883	8.34283	11.38875	14.68366	16.91898	19.02277	21.66599	23.58935
10	2.15586	2.55821	3.24697	3.94030	4.86518	6.73720	9.34182	12.54886	15.98718	18.30704	20.48318	23.20925	25.18818
11	2.60322	3.05348	3.81575	4.57481	5.57778	7.58414	10.34100	13.70069	17.27501	19.67514	21.92005	24.72497	26.75685
12	3.07382	3.57057	4.40379	5.22603	6.30380	8.43842	11.34032	14.84540	18.54935	21.02607	23.33666	26.21697	28.29952
13	3.56503	4.10692	5.00875	5.89186	7.04150	9.29907	12.33976	15.98391	19.81193	22.36203	24.73560	27.68825	29.81947
14	4.07467	4.66043	5.62873	6.57063	7.78953	10.16531	13.33927	17.11693	21.06414	23.68479	26.11895	29.14124	31.31935
15	4.60092	5.22935	6.26214	7.26094	8.54676	11.03654	14.33886	18.24509	22.30713	24.99579	27.48839	30.57791	32.80132
16	5.14221	5.81221	6.90766	7.96165	9.31224	11.91222	15.33850	19.36886	23.54183	26.29623	28.84535	31.99993	34.26719
17	5.69722	6.40776	7.56419	8.67176	10.08519	12.79193	16.33818	20.48868	24.76904	27.58711	30.19101	33.40866	35.71847
18	6.26480	7.01491	8.23075	9.39046	10.86494	13.67529	17.33790	21.60489	25.98942	28.86930	31.52638	34.80531	37.15645
19	6.84397	7.63273	8.90652	10.11701	11.65091	14.56200	18.33765	22.71781	27.20357	30.14353	32.85233	36.19087	38.58226
20	7.43384	8.26040	9.59078	10.85081	12.44261	15.45177	19.33743	23.82769	28.41198	31.41043	34.16961	37.56623	39.99685
21	8.03365	8.89720	10.28290	11.59131	13.23960	16.34438	20.33723	24.93478	29.61509	32.67057	35.47888	38.93217	41.40106
22	8.64272	9.54249	10.98232	12.33801	14.04149	17.23962	21.33704	26.03927	30.81328	33.92444	36.78071	40.28936	42.79565
23	9.26042	10.19572	11.68855	13.09051	14.84796	18.13730	22.33688	27.14134	32.00690	35.17246	38.07563	41.63840	44.18128
24	9.88623	10.85636	12.40115	13.84843	15.65868	19.03725	23.33673	28.24115	33.19624	36.41503	39.36408	42.97982	45.55851
25	10.51965	11.52398	13.11972	14.61141	16.47341	19.93934	24.33659	29.33885	34.38159	37.65248	40.64647	44.31410	46.92789
26	11.16024	12.19815	13.84390	15.37916	17.29188	20.84343	25.33646	30.43457	35.56317	38.88514	41.92317	45.64168	48.28988
27	11.80759	12.87850	14.57338	16.15140	18.11390	21.74940	26.33634	31.52841	36.74122	40.11327	43.19451	46.96294	49.64492
28	12.46134	13.56471	15.30786	16.92788	18.93924	22.65716	27.33623	32.62049	37.91592	41.33714	44.46079	48.27824	50.99338
29	13.12115	14.25645	16.04707	17.70837	19.76774	23.56659	28.33613	33.71091	39.08747	42.55697	45.72229	49.58788	52.33562
30	13.78672	14.95346	16.79077	18.49266	20.59923	24.47761	29.33603	34.79974	40.25602	43.77297	46.97924	50.89218	53.67196



F Table for alpha=0.10



df2/df1	1	2	3	4	5	6	7	8	9	10	12	15	20	24	30	40	60	120	INF
1	39.86346	49.5	53.59324	55.83296	57.24008	58.20442	58.90595	59.43898	59.85759	60.19498	60.70521	61.22034	61.74029	62.00205	62.26497	62.52905	62.79428	63.06064	63.32812
2	8.52632	9	9.16179	9.24342	9.29263	9.32553	9.34908	9.36677	9.38054	9.39157	9.40813	9.42471	9.44131	9.44962	9.45793	9.46624	9.47456	9.48289	9.49122
3	5.53832	5.46238	5.39077	5.34264	5.30916	5.28473	5.26619	5.25167	5.24	5.23041	5.21562	5.20031	5.18448	5.17636	5.16811	5.15972	5.15119	5.14251	5.1337
4	4.54477	4.32456	4.19086	4.10725	4.05058	4.00975	3.97897	3.95494	3.93567	3.91988	3.89553	3.87036	3.84434	3.83099	3.81742	3.80361	3.78957	3.77527	3.76073
5	4.06042	3.77972	3.61948	3.5202	3.45298	3.40451	3.3679	3.33928	3.31628	3.2974	3.26824	3.23801	3.20665	3.19052	3.17408	3.15732	3.14023	3.12279	3.105
6	3.77595	3.4633	3.28876	3.18076	3.10751	3.05455	3.01446	2.98304	2.95774	2.93693	2.90472	2.87122	2.83634	2.81834	2.79996	2.78117	2.76195	2.74229	2.72216
7	3.58943	3.25744	3.07407	2.96053	2.88334	2.82739	2.78493	2.75158	2.72468	2.70251	2.66811	2.63223	2.59473	2.57533	2.55546	2.5351	2.51422	2.49279	2.47079
8	3.45792	3.11312	2.9238	2.80643	2.72645	2.66833	2.62413	2.58935	2.56124	2.53804	2.50196	2.46422	2.42464	2.4041	2.38302	2.36136	2.3391	2.31618	2.29257
9	3.3603	3.00645	2.81286	2.69268	2.61061	2.55086	2.50531	2.46941	2.44034	2.41632	2.37888	2.33962	2.29832	2.27683	2.25472	2.23196	2.20849	2.18427	2.15923
10	3.28502	2.92447	2.72767	2.60534	2.52164	2.46058	2.41397	2.37715	2.34731	2.3226	2.28405	2.24351	2.20074	2.17843	2.15543	2.13169	2.10716	2.08176	2.05542
11	3.2252	2.85951	2.66023	2.53619	2.45118	2.38907	2.34157	2.304	2.2735	2.24823	2.20873	2.16709	2.12305	2.10001	2.07621	2.05161	2.02612	1.99965	1.97211
12	3.17655	2.8068	2.60552	2.4801	2.39402	2.33102	2.28278	2.24457	2.21352	2.18776	2.14744	2.10485	2.05968	2.03599	2.01149	1.9861	1.95973	1.93228	1.90361
13	3.13621	2.76317	2.56027	2.43371	2.34672	2.28298	2.2341	2.19535	2.16382	2.13763	2.09659	2.05316	2.00698	1.98272	1.95757	1.93147	1.90429	1.87591	1.8462
14	3.10221	2.72647	2.52222	2.39469	2.30694	2.24256	2.19313	2.1539	2.12195	2.0954	2.05371	2.00953	1.96245	1.93766	1.91193	1.88516	1.85723	1.828	1.79728
15	3.07319	2.69517	2.48979	2.36143	2.27302	2.20808	2.15818	2.11853	2.08621	2.05932	2.01707	1.97222	1.92431	1.89904	1.87277	1.84539	1.81676	1.78672	1.75505
16	3.04811	2.66817	2.46181	2.33274	2.24376	2.17833	2.128	2.08798	2.05533	2.02815	1.98539	1.93992	1.89127	1.86556	1.83879	1.81084	1.78156	1.75075	1.71817
17	3.02623	2.64464	2.43743	2.30775	2.21825	2.15239	2.10169	2.06134	2.02839	2.00094	1.95772	1.91169	1.86236	1.83624	1.80901	1.78053	1.75063	1.71909	1.68564
18	3.00698	2.62395	2.41601	2.28577	2.19583	2.12958	2.07854	2.03789	2.00467	1.97698	1.93334	1.88681	1.83685	1.81035	1.78269	1.75371	1.72322	1.69099	1.65671
19	2.9899	2.60561	2.39702	2.2663	2.17596	2.10936	2.05802	2.0171	1.98364	1.95573	1.9117	1.86471	1.81416	1.78731	1.75924	1.72979	1.69876	1.66587	1.63077
20	2.97465	2.58925	2.38009	2.24893	2.15823	2.09132	2.0397	1.99853	1.96485	1.93674	1.89236	1.84494	1.79384	1.76667	1.73822	1.70833	1.67678	1.64326	1.60738
21	2.96096	2.57457	2.36489	2.23334	2.14231	2.07512	2.02325	1.98186	1.94797	1.91967	1.87497	1.82715	1.77555	1.74807	1.71927	1.68896	1.65691	1.62278	1.58615
22	2.94858	2.56131	2.35117	2.21927	2.12794	2.0605	2.0084	1.9668	1.93273	1.90425	1.85925	1.81106	1.75899	1.73122	1.70208	1.67138	1.63885	1.60415	1.56678
23	2.93736	2.54929	2.33873	2.20651	2.11491	2.04723	1.99492	1.95312	1.91888	1.89025	1.84497	1.79643	1.74392	1.71588	1.68643	1.65535	1.62237	1.58711	1.54903
24	2.92712	2.53833	2.32739	2.19488	2.10303	2.03513	1.98263	1.94066	1.90625	1.87748	1.83194	1.78308	1.73015	1.70185	1.6721	1.64067	1.60726	1.57146	1.5327
25	2.91774	2.52831	2.31702	2.18424	2.09216	2.02406	1.97138	1.92925	1.89469	1.86578	1.82	1.77083	1.71752	1.68898	1.65895	1.62718	1.59335	1.55703	1.5176
26	2.90913	2.5191	2.30749	2.17447	2.08218	2.01389	1.96104	1.91876	1.88407	1.85503	1.80902	1.75957	1.70589	1.67712	1.64682	1.61472	1.5805	1.54368	1.5036
27	2.90119	2.51061	2.29871	2.16546	2.07298	2.00452	1.95151	1.90909	1.87427	1.84511	1.79889	1.74917	1.69514	1.66616	1.63356	1.60032	1.56859	1.53129	1.49057
28	2.89385	2.50276	2.2906	2.15714	2.06447	1.99585	1.9427	1.90014	1.8652	1.83593	1.78951	1.73954	1.68519	1.656	1.62519	1.5925	1.55753	1.51976	1.47841
29	2.88703	2.49548	2.28307	2.14941	2.05658	1.98781	1.93452	1.89184	1.85679	1.82741	1.78081	1.7306	1.67593	1.64655	1.61551	1.58253	1.54721	1.50899	1.46704
30	2.88069	2.48872	2.27607	2.14223	2.04925	1.98033	1.92692	1.88412	1.84896	1.81949	1.7727	1.72227	1.66731	1.63774	1.60648	1.57323	1.53757	1.49891	1.45636
40	2.83535	2.44037	2.22609	2.09095	1.99682	1.92688	1.87252	1.82886	1.7929	1.76269	1.71456	1.66241	1.60515	1.57411	1.54108	1.50562	1.46716	1.42476	1.37691
60	2.79107	2.39325	2.17741	2.04099	1.94571	1.87472	1.81939	1.77483	1.73802	1.70701	1.65743	1.60337	1.54349	1.51072	1.47554	1.43734	1.3952	1.34757	1.29146
120	2.74781	2.34734	2.12999	1.9923	1.89587	1.82381	1.76748	1.72196	1.68425	1.65238	1.6012	1.545	1.48207	1.44723	1.40938	1.3676	1.32034	1.26457	1.19256
inf	2.70554	2.30259	2.0838	1.94486	1.84727	1.77411	1.71672	1.6702	1.63152	1.59872	1.54578	1.48714	1.4206	1.38318	1.34187	1.29513	1.23995	1.1686	1



**Critical Values of the Mann-Whitney U**  
(Two-Tailed Testing)

n <sub>2</sub>	α	n <sub>1</sub>																	
		3	4	5	6	7	8	9	10	11	12	13	14	15	16	17	18	19	20
3	.05	--	0	0	1	1	2	2	3	3	4	4	5	5	6	6	7	7	8
	.01	--	0	0	0	0	0	0	0	0	1	1	1	2	2	2	2	3	3
4	.05	--	0	1	2	3	4	4	5	6	7	8	9	10	11	11	12	13	14
	.01	--	--	0	0	0	1	1	2	2	3	3	4	5	5	6	6	7	8
5	.05	0	1	2	3	5	6	7	8	9	11	12	13	14	15	17	18	19	20
	.01	--	--	0	1	1	2	3	4	5	6	7	7	8	9	10	11	12	13
6	.05	1	2	3	5	6	8	10	11	13	14	16	17	19	21	22	24	25	27
	.01	--	0	1	2	3	4	5	6	7	9	10	11	12	13	15	16	17	18
7	.05	1	3	5	6	8	10	12	14	16	18	20	22	24	26	28	30	32	34
	.01	--	0	1	3	4	6	7	9	10	12	13	15	16	18	19	21	22	24
8	.05	2	4	6	8	10	13	15	17	19	22	24	26	29	31	34	36	38	41
	.01	--	1	2	4	6	7	9	11	13	15	17	18	20	22	24	26	28	30
9	.05	2	4	7	10	12	15	17	20	23	26	28	31	34	37	39	42	45	48
	.01	0	1	3	5	7	9	11	13	16	18	20	22	24	27	29	31	33	36
10	.05	3	5	8	11	14	17	20	23	26	29	33	36	39	42	45	48	52	55
	.01	0	2	4	6	9	11	13	16	18	21	24	26	29	31	34	37	39	42
11	.05	3	6	9	13	16	19	23	26	30	33	37	40	44	47	51	55	58	62
	.01	0	2	5	7	10	13	16	18	21	24	27	30	33	36	39	42	45	48
12	.05	4	7	11	14	18	22	26	29	33	37	41	45	49	53	57	61	65	69
	.01	1	3	6	9	12	15	18	21	24	27	31	34	37	41	44	47	51	54
13	.05	4	8	12	16	20	24	28	33	37	41	45	50	54	59	63	67	72	76
	.01	1	3	7	10	13	17	20	24	27	31	34	38	42	45	49	53	56	60
14	.05	5	9	13	17	22	26	31	36	40	45	50	55	59	64	67	74	78	83
	.01	1	4	7	11	15	18	22	26	30	34	38	42	46	50	54	58	63	67
15	.05	5	10	14	19	24	29	34	39	44	49	54	59	64	70	75	80	85	90
	.01	2	5	8	12	16	20	24	29	33	37	42	46	51	55	60	64	69	73
16	.05	6	11	15	21	26	31	37	42	47	53	59	64	70	75	81	86	92	98
	.01	2	5	9	13	18	22	27	31	36	41	45	50	55	60	65	70	74	79
17	.05	6	11	17	22	28	34	39	45	51	57	63	67	75	81	87	93	99	105
	.01	2	6	10	15	19	24	29	34	39	44	49	54	60	65	70	75	81	86
18	.05	7	12	18	24	30	36	42	48	55	61	67	74	80	86	93	99	106	112
	.01	2	6	11	16	21	26	31	37	42	47	53	58	64	70	75	81	87	92
19	.05	7	13	19	25	32	38	45	52	58	65	72	78	85	92	99	106	113	119
	.01	3	7	12	17	22	28	33	39	45	51	56	63	69	74	81	87	93	99
20	.05	8	14	20	27	34	41	48	55	62	69	76	83	90	98	105	112	119	127
	.01	3	8	13	18	24	30	36	42	48	54	60	67	73	79	86	92	99	105